

Animals, including humans Test 2 (mid-topic)

Name: _____ Class: _____ Date: _____

1. Some children were talking about what animals that live on land need to survive.

Circle the name of the child who is right.



Pat

They need water, food and a home.

They need water, air and a home.



Sam



Sian

They need water, food and air.

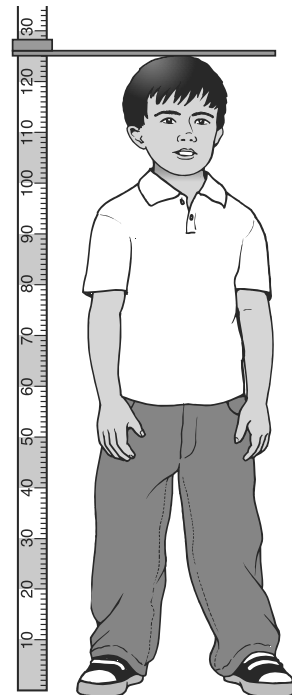
KU

1 mark

2. a) Every year, on his birthday, Mum measures Sami to see how much he has grown.

Today is his 7th birthday.

How tall is he?



AWS

1 mark

Total for this page

b) Mum writes down how tall he is and how much he has grown. Fill in the boxes for Sami's height and how much he has grown.

Age	Height	How much grown since last birthday
2 years	90 cm	
3 years	98 cm	8 cm
4 years	104 cm	6 cm
5 years	110 cm	6 cm
6 years	120 cm	10 cm
7 years		

c) Tick the age that shows when Sami had grown most.

3 4 5 6 7

d) Why might Mum have found it hard to measure Sami on his first birthday?

.....



AWS

2 marks

AWS

1 mark


A

1 mark

3. a) Sort the food into two groups. Draw arrows.



yoghurt



bread



butter



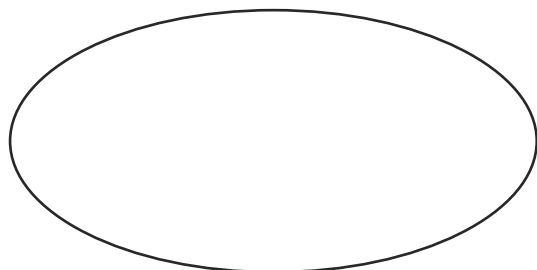
milk



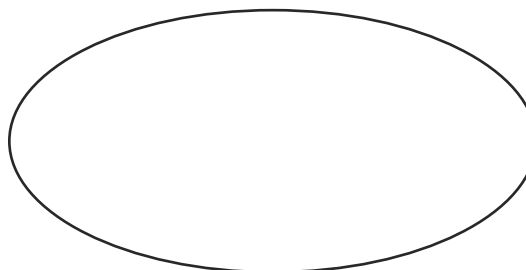
potatoes



pasta



dairy



carbohydrates

b) Write the name of one more food in **each** group.

KU

2 marks

KU

2 marks

/10

Total for this test